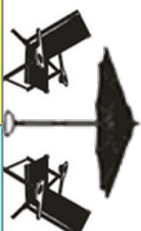



Tang Math Summer Fun!

Summertime!

Play Coin Bubble	Play Minus Mania	Play Expresso 3-numbers (+ - x ÷)	Play How Much How Many	Play Satis- Fraction Compare (all levels)	Play NumTanga Level 5 & 6	Play BreakApart (÷)	Partitive	Read & Play Math Potatoes	Play Missing (÷) Combo (easy level)	Complete Tangy Tuesday Puzzle Pack	Play Kakooma Play + & x
------------------------	------------------------	--	------------------------------	---	---------------------------------	---------------------------	-----------	---------------------------------	--	---	-------------------------------



Go to level 6!



Level 5 Game Board
TangMath.com

- Find games and activities at TangMath.com
- Play each game for 15 minutes
- Try to complete each level with no errors
- Play the harder levels if activities are too easy
- Move to the previous game board if you get stuck
- Get help from an adult or family member
- Sign up to win prizes for each level you complete

TANGY TUESDAY PUZZLE PACK

Fun brain puzzles that make you smarter!

Numskill™
ADDITION
In each box, look for ADDITION.

NumTanga™
NUMBERS TO 20
In each box, write the number.

DigiCross™
3RD GRADE
Name: _____
greater width rhombus perimeter ninety area twelve sixty tens thirds

Jakooma®
5 PLUS
Name: _____
Puzzled? In each 5-number pentagon, find the number that is the sum of the previous two boxes.

ACROSS

- 5/9 is ___ than 5/10
- 4 sixths is the same as 2 ___
- 84 days is ___ weeks
- rectangle's area: length x ___

DOWN

- space inside a shape
- length around a shape
- 6 x 15 = ___
- 9 x 80 = 72 ___
- round 57 to nearest 10


© 2016 Gregory Tang. All rights reserved. store.gregtangmath.com

Math Centers
Teaching Activities
Homework
Early Finishers
Fun Reward Games

Created by

GREG TANG MATH

store.gregtangmath.com



five eighteen perimeter hundredths greater nine eight four true sixty three fourteen

ACROSS

- 2. 9 tenths - 4 tenths = ____ tenths
- 5. $126 \div 9$
- 8. $5/7$ is ____ than $3/8$
- 9. the distance around a shape
- 10. $81 \div 12$ has remainder ____
- 11. $6 \times 417 = 2,400 + \text{____} + 42$

DOWN

- 1. 96 is ____ times as much as 12
- 3. $.08 =$ eight ____
- 4. "quart" in quarter and quartet
- 6. 72 is a multiple of ____
- 7. $4,990 + 2,010 = 7,000$
- 12. 3,489 is closest to ____ thousands

Snake

Name: _____

Licensed to:

store.gregtangmath.com © 2016 Gregory Tang

4.1.10

Fill in each blank box in order, combining the numbers from the previous two boxes.

6	+3		$\times 10$		-80		$\times \frac{1}{2}$	
								+4
	+3		$\times \frac{1}{5}$		-47		$\times 8$	
$\times 7$								
	-2		$\times \frac{1}{6}$		+1		$\times 7$	70

70		+4			+49	
$\times \frac{1}{7}$	$\times \frac{1}{4}$		$\times 9$	$\times 3$	$\times \frac{1}{8}$	
$\times 8$	$\times 2$	-18	-4	-3		
	$\times \frac{1}{10}$		$\times \frac{1}{6}$		5	

NumTanga™



Name: _____

Licensed to:

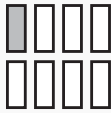

store.gregtangmath.com © 2016 Gregory Tang


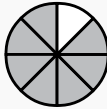
4.1.10



In each empty box, write the matching value between adjacent cards.


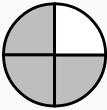
$\frac{1}{6}$	
	one half



$\frac{1}{6}$


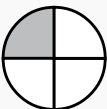
$\frac{5}{6}$	
	one sixth


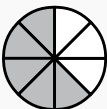
$\frac{1}{3}$	
	five sixths


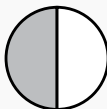
$\frac{1}{4}$	
	one fifth

$\frac{7}{8}$	
	four fifths

$\frac{1}{2}$	
	one eighth

$\frac{4}{5}$	
	three eighths

$\frac{1}{8}$	
	seven eighths

$\frac{5}{8}$	
	three fourths

Kakooma[®] Times

4.1.10

Name: _____

Licensed to:

store.gregtangmath.com © 2016 Gregory Tang

Puzzled? In each 8-number square, find the number that is the product of 2 other numbers. Use all 8 products to create 1 final addition puzzle and solve.

4	63	8	5	63	7	7	45	3
6		32	90		6	40		6
50	60	35	14	35	24	8	30	21
8	6	50	X			24	63	8
2		60				72		32
18	4	56				9	28	6
5	40	20	6	10	70	4	6	45
24		8	35		7	90		54
90	63	6	36	24	18	7	28	80

	+	



Final
answer:

Fill in the empty boxes to make every horizontal and vertical equation correct. Use the correct order of operations and read left to right and top to bottom. Use every number in the number bank once.

NUMBER BANK

2 3 4 5 6 7 8 9

7	×	1	=	3	+	
-		+		+		+
	=		+		-	
=		=		=		=
	-	1	=	2	+	5
-		×		×		+
	=		+	4	-	8